



Satellite Learning Sheet

Monday, May 6th

BIBLE/DEVOTION
<u>Bible Devotion:</u> Parents, please do a Bible devotion with your child.
READING / LANGUAGE ARTS
1. <u>The Tortoise and the Hare:</u> (REREAD) <ul style="list-style-type: none">- Re-read the passage out loud to an adult.- Answer the interview questions.- Complete the adverb review (on the back of the packet)
SPELLING / CURSIVE
<u>Spelling:</u> <ul style="list-style-type: none">- Choose an activity on the May Spelling Activity Menu. <u>Cursive:</u> Practice writing your first and last name in cursive on the provided practice sheet.
MATH
1. <u>Math Review:</u> <ul style="list-style-type: none">- Answer the review questions (these are all concepts we have learned this year) 2. <u>Measuring Capacity:</u> Use the provided information to answer the questions about cups, pints, quarts, and gallons. <ul style="list-style-type: none">- Make sure to do both sides of the worksheet! 3. <u>Practice your Multiplication Facts: (OPTIONAL)</u> <ul style="list-style-type: none">- You can do this on Education.com, Fun4theBrain.com, or you can use flash cards.
SCIENCE / SOCIAL STUDIES
<u>Continue Working on your Travel Brochure:</u> (Due Friday, May 17 th) Keep working on your brochure! <ul style="list-style-type: none">- If you need more information for your brochure, you can do extra research online.- Don't forget to use your nicest handwriting!

Student's Name: _____

My child has completed all Satellite Learning assignments _____ (initials)

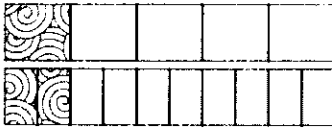
Parent Comments (questions/concerns):



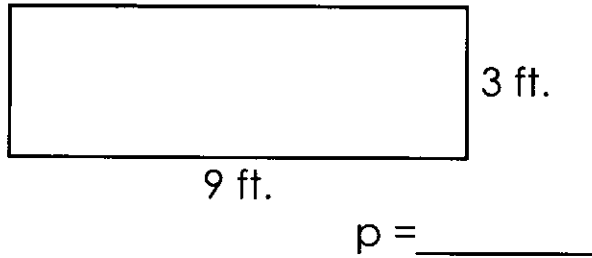
5-A-Day Math Review: Week 10

Wednesday

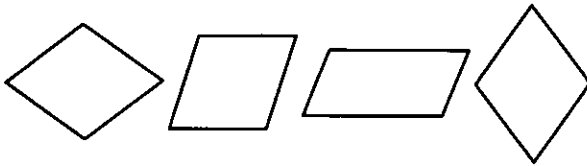
① Write the equivalent fraction.

$$\frac{1}{5} = \frac{\square}{\square}$$


② Find the perimeter.

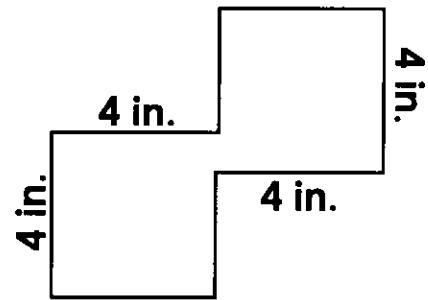


③ Which shape does not belong?







④ The classroom has 32 desks. There are 8 rows of desks. How many desks are in each row? Draw a model to show your work.

⑤ Find the area.



Thursday

Inches of Snowfall

January	
February	
March	
April	

 = 10 inches

- How much more snow fell in February than in April?
- How much snow fell in January and March in total?
- How much less snow fell in the March than in February?

④ Tam had 16 dollars. He earned 28 dollars walking his neighbors' dogs. He spent 21 dollars on books. How much money does he have left?

$$16 + 28 = \underline{\quad}$$

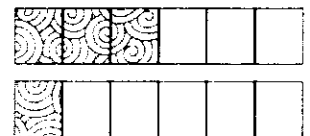
$$44 - 21 = \underline{\quad}$$

$$m = \underline{\quad}$$


He has _____ dollars left.

⑤ Compare the fractions.

$$\frac{3}{6} \bigcirc \frac{1}{6}$$



The Tortoise and the Hare



One fine summer day, Hare was showing off to the other animals. "I'm faster than any animal in the woods," Hare boasted. "None of you is as quick as I am."

Slow-moving Tortoise was passing by and heard what Hare was saying. "I know someone who can beat you in a race," said Tortoise. "Me!"

Hare nearly fell down laughing at the thought of such a poky animal beating him in a race. "Very well," said Hare. "I will race you, and I will win!"

The other animals marked off a racecourse through the woods. Tortoise and Hare came to the starting line.

"Get ready. Get set. Go!" shouted Owl.

Hare raced off as fast as he could go. Soon, he was so far ahead that he could not see slow-moving Tortoise.

“I think I’ll take a little nap under this shady tree,” Hare decided. “Tortoise is so far behind, he will never catch up.” Soon, Hare was fast asleep.


Slowly and steadily, Tortoise moved along the racecourse. He quietly passed the sleeping Hare and continued on his way. When Hare woke up from his nap, he didn’t see Tortoise anywhere.

“I knew that silly tortoise was the slowest animal on earth,” Hare laughed as he continued the race. Suddenly, Hare heard some loud shouting. “What is that?” he wondered.

Hurrying toward the sounds, he saw that Tortoise was only a few feet from the finish line. The loud shouting he had heard was the sound of the other animals cheering for Tortoise.

Hare raced as fast as he could, but there was no way he could get to the finish line before Tortoise did. While the other animals congratulated Tortoise, the embarrassed Hare quietly crept away.

The moral of this story is: Slow and steady wins the race.



Name _____

**The Tortoise
and the Hare**

An Interview

A reporter from the local television station is interviewing Hare and Tortoise at the scene of the big race. Write the answers that you think Hare and Tortoise would give to the reporter.

Before the race:

Reporter: Why are you racing Tortoise today?

Hare: _____

Reporter: How easy do you think it will be to win the race?

Hare: _____

Reporter: Tortoise, why do you think you can beat Hare?

Tortoise: _____

Reporter: What is your plan for beating Hare in the race?

Tortoise: _____

After the race:

Reporter: Congratulations, Tortoise! At what point did you know you would win the race?

Tortoise: _____

Reporter: I can't talk to Hare about the race. He seems to have disappeared.

Read and Understand with Leveled Texts, Grade 3 • EMC 3443 • © Evan-Moor Corp.

Name _____

Adverbs

An adverb that ends in **ly** usually tells how something is done.

Fill in the missing adverb in each sentence.

happily steadily slowly angrily

1. A tortoise moves _____ most of the time.
2. They worked _____ all day to finish the job.
3. The animals cheered _____ when Tortoise won the race.
4. The boy shouted _____ when the dog took his sandwich.

Add **ly** to the words below to make adverbs. If the word ends in **y**, change the **y** to **i** before you add **ly**.

steady + ly = steadily

happy + ly = happily

- | | |
|-----------------|-----------------|
| 1. sleepy _____ | 4. handy _____ |
| 2. sudden _____ | 5. quick _____ |
| 3. loud _____ | 6. pretty _____ |

Write sentences using at least three of the adverbs you made.

1. _____

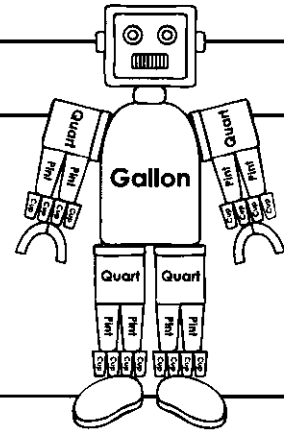
2. _____

3. _____

Name: _____

Measuring Capacity

Remember: 1 gallon = 4 quarts = 8 pints = 16 cups
 1 gallon = 4 quarts
 1 quart = 2 pints
 1 pint = 2 cups



Fill in the correct number for each statement.

- a. 1 gallon = _____ pints
 b. 1 gallon = _____ quarts
 c. 1 quart = _____ pints
 d. 1 quart = _____ cups
 e. 1 pint = _____ cups
 f. 1 gallon = _____ cups

Circle the greater amount for each pair.

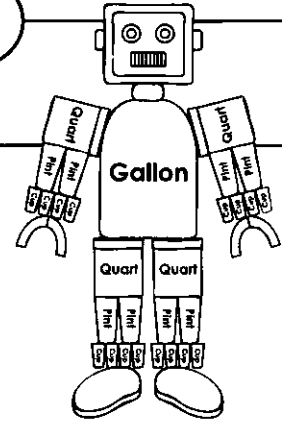
- g. 2 quarts or 1 gallon
 h. 5 quarts or 1 gallon
 i. 4 cups or 1 pint
 j. 2 cups or 1 quart
 k. 4 pints or 1 quart
 l. 2 pints or 2 quarts

Circle the best answer.

- m. Sara-Beth puts milk on her cereal. How much milk does she probably use?
 1 gallon 1 quart 1 pint
- n. Tom wants to paint his bedroom walls a different color. How much paint is he most likely to buy?
 2 gallons 1 quart 3 cups
- o. Each day, Isaac feeds his puppy one cup of dog food in the morning and one cup in the evening. How much food does Isaac feed his puppy during a weekend?
 1 gallon 1 quart 1 pint

Name: _____

Capacity Word Problems



Use your knowledge of capacity to answer each question.

Remember: 1 gallon = 4 quarts = 8 pints = 16 cups
 1 gallon = 4 quarts
 1 quart = 2 pints
 1 pint = 2 cups

1. Emily needs 5 cups of milk to make a vanilla milkshake. Should she buy a pint, a quart, or a gallon of milk? Explain your answer.


2. Kenny is making creamy rice pudding. His recipe requires 4 cups of milk. He has a quart of milk in his fridge. Does he have enough milk? Explain.

3. On December 1st, Miss Lait went to the grocery store and bought 2 quarts of milk. On December 7th, she bought three times as much milk. How much milk did she buy on December 7th? (Circle the best answer and explain.)
 - a. less than a gallon
 - b. exactly one gallon
 - c. more than a gallon

Travel Brochure - Due Friday, May 17th

Use the attached template to create a travel brochure for the country you researched. I've included an example below, but you may create your travel brochure however you would like.

Created by:
Mrs. Atkins

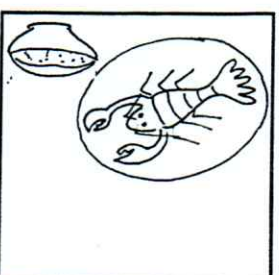


Visit
Maldives

Interesting Facts

1. Maldives has the world's largest shark population.
2. Maldives' islands are made of coral and sit on top of underwater volcanoes!

Try New Foods



Maldives has fun tropical dishes to try!

- Fish Soup
- Smoked Tuna
- Banana Flower
- Saad
- Sago Pudding
- Curry
- Lobster

- Make sure to include the following information:
- ✓ Country name and illustration/picture
 - ✓ Climate and weather information
 - ✓ Fun things to do and/or see
 - ✓ Interesting facts and food/culture


Maldives has some incredible sites to see and places to visit!


- * Underwater Restaurants
- * Banana Reef
- * Fish Market
- * Sea of Stars

There are so many fun things to do while visiting Maldives:

- * Snorkeling
- * Skydiving
- * Water Sports
- * Submarine Tour
- * Swim with Manta Rays
- * Boat Tours

Beautiful, tropical weather. The average temperature of 30 degrees provides warm, sunny days for enjoying outdoor activities. Don't visit during monsoon season, though, because you'll be sure to get wet!











You may draw pictures or print pictures online and glue them to your brochure.

You may also do additional research on your country if needed.

Don't forget to use your nicest handwriting and color your brochure!



Spelling Words

Homophones

Generalization: Homophones are words that sound alike but have different spellings and meanings. Context is needed to know which homophone to use.

cellar	seller
weather	whether
desert	dessert
bored	board
allowed	aloud
hire	higher

Challenge Word: principal principle

Spelling Words

Long I - Homophones

Generalization: Homophones are words that sound the same but are spelled differently. To spell homophones correctly, students need to connect a word's meaning to its spelling pattern.

Long I

write

right

side

sighed

mite

might

Short I

billed

build

missed

mist

Challenge Word: hymn

Spelling Words

Inflected Endings - Words that end in "y"

Generalization: When a base word ends with a consonant and a y, change the y to i before adding *es* or *ed*.

consonant-y plural

replies

copies

hurries

carries

studies

empties

consonant-y past tense

replied

copied

hurried

carried

studied

emptied

Challenge Word: multiplies